



CEVNI – ENDORSEMENT TEST # 2 - FOR ICC

(CEVNI Endorsement for the IYT International Certificate of Competence (Code Europeen Des Voies De Navigation Interieure) (European Code for Inland Waterways))

Candidates Name _____ Passport or ID Number _____

School Name _____ School Number _____

Answer All Questions - Time Allowed: 45 Minutes Pass Mark - 12 correct

This exam contains 16 questions. Only one answer is correct. If you fill out two or more answers for the same question it will be counted as a wrong answer. Read the question carefully before you answer. Use of notepaper or reference books is not allowed.

Candidates Marks

/16

Pass/Fail

Mark your answers directly on sheet- Circle the answer you think is correct

1. What is the meaning of this sign?

1. Keep a sharp lookout
2. No passing
3. There are navigational restrictions, make enquiries
4. Be prepared to stop




2. What is the meaning of this sound signal?

1. My engines are going astern.
2. Imminent danger of collision.
3. I am going to turn to port.
4. I am going to turn to starboard




3. What is the meaning of this signal when displayed on a vessel?

1. The vessel requires medical assistance.
2. The vessel is under 24m long and carrying passengers.
3. The vessel is carrying/loading a dangerous cargo.
4. The vessel has priority.




4. What is the meaning of this signal?

1. Do not proceed side by side
2. Do not make wash
3. Strong current, risk of waves



5. A vessel on a Class 1 waterway, proceeding upstream showing this signal is:

1. Restricted in its ability to manoeuvre.
2. Intending to pass downstream traffic starboard to starboard.
3. Intending to pass downstream traffic port to port.
4. Indicating that downstream traffic may pass on either side.



6. What is the meaning of this sign?

1. Channel has an 'S' bend ahead.
2. Vessels should cross to the other side of the channel.
3. Vessels should not cross to the other side of the channel.
4. Vessels manoeuvring with difficulty may be encountered ahead.



7. In which areas is it forbidden to moor?

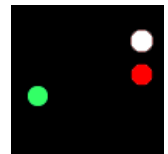
1. Where high speed navigation is permitted?
2. In areas where turning is permitted
3. Within 50 metres of a boat which carries a blue cone.

8. What is the normal minimum age for the helmsman of a vessel on inland waterways?

1. 16.
2. 21.
3. 18.
4. 14.

9. What is a vessel showing this signal?

1. Pilot boat.
2. Ferry.
3. Dredger.
4. Fishing vessel.



10. You are navigating in shallow water and the boat does not respond to the rudder. Should you:

1. Make your course a zig zag
2. Increase speed
3. Decrease speed


11. What is the meaning of the following sign?

1. No entry.
2. Keep to the middle of the channel.
3. Give a sound signal.
4. Keep a particularly sharp lookout.



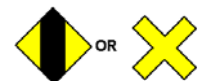
12. What is a vessel showing this signal?

1. Towing barges.
2. Fishing.
3. Restricted in ability to manoeuvre, pass on its port side.
4. Restricted in ability to manoeuvre, pass on its starboard side



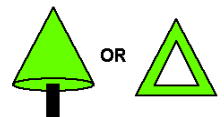
13. The following signs indicate:

1. 2 Channels cross ahead.
2. Channel crosses to right side.
3. Channel crosses to left side.
4. Deepest water is in the centre.



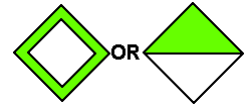
14. What is the meaning of this sign?

1. Stop at the junction ahead.
5. There is a hazard on the right side of the channel.
6. Warning - Ferry ahead.
7. There is a hazard on the left side of the channel.



15. The following signs indicate:

1. Channel near the right bank.
2. No mooring.
3. Re-fuelling station.
4. Channel near the left bank.



16. The following signs indicate:

1. No entry.
2. Vessels must keep to the right.
3. Vessels must keep to the left.
4. Entry permitted.

